

# Maths All Around Me at School

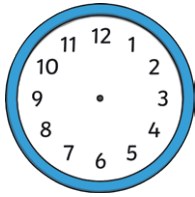
## Classroom Shape Hunt

What different shapes can you find in the classroom? Draw some examples in the boxes.

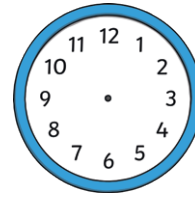
<p><b>Squares</b></p>	<p><b>Circles</b></p>
<p><b>Rectangles</b></p>	<p><b>Triangles</b></p>
<p><b>Semi-circles</b></p>	<p><b>Other Shapes</b></p>

Fill in the missing times on the clocks.

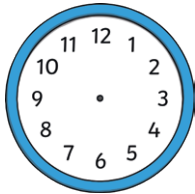
Daniel woke up at 8 o'clock.



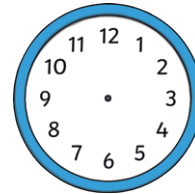
School started at 9 o'clock.



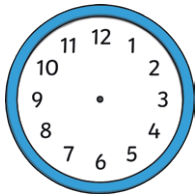
Daniel had lunch at half past 12.



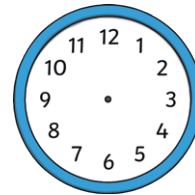
School finished at half past 2.



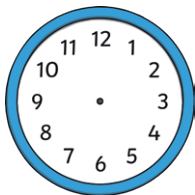
Daniel finished his homework at half past 3.



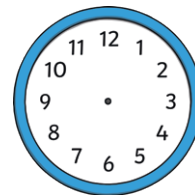
He ate his dinner at 6 o'clock.



Daniel watched television at 7 o'clock.



Daniel went to bed at half past 8.



Where can you see numbers in the classroom? Write down five different places.

1. \_\_\_\_\_
2. \_\_\_\_\_
3. \_\_\_\_\_
4. \_\_\_\_\_
5. \_\_\_\_\_