


Finding Percentages of Amounts

Twinkl Department Store Sale!

For one day only, all our items are 75% of their full price with a Twinkl Loyalty Card! Work out the sale price for each item in the shop.

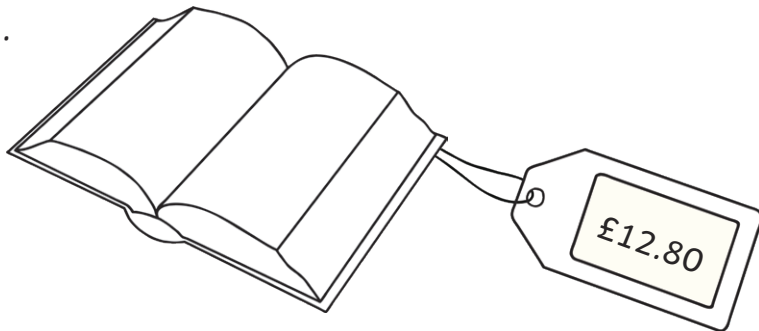
Top tip: To find 75% of a number, you can find one half, then one quarter, then add the two numbers together.

1.



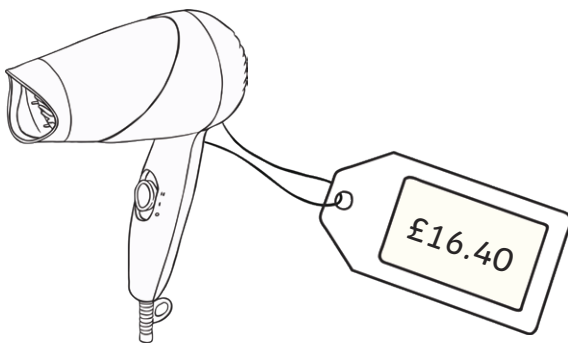
75% of price =

2.



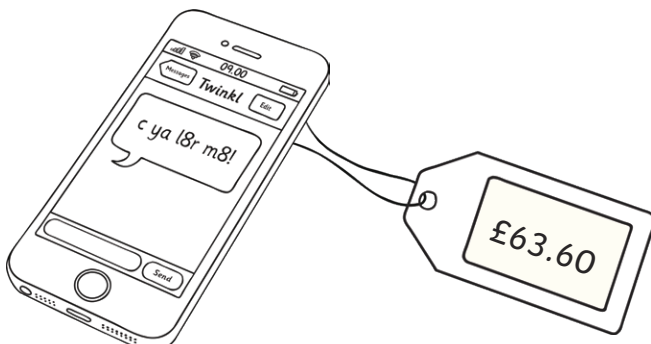
75% of price =

3.



75% of price =

4.



75% of price =

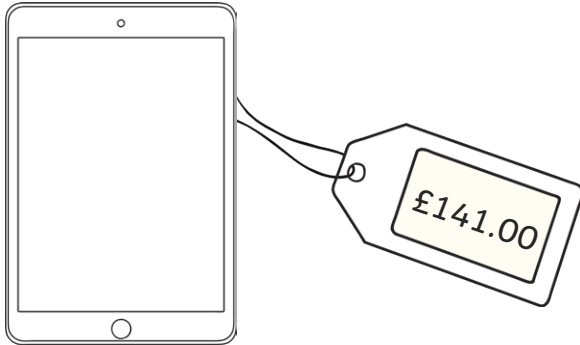
Finding Percentages of Amounts

Twinkl Department Store Sale!

For one day only, all our items are 75% of their full price with a Twinkl Loyalty Card! Work out the sale price for each item in the shop.

Top tip: To find 75% of a number, you can find one half, then one quarter, then add the two numbers together.

5.



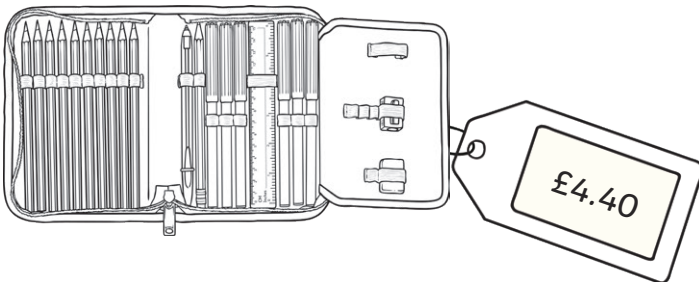
75% of price =

6.



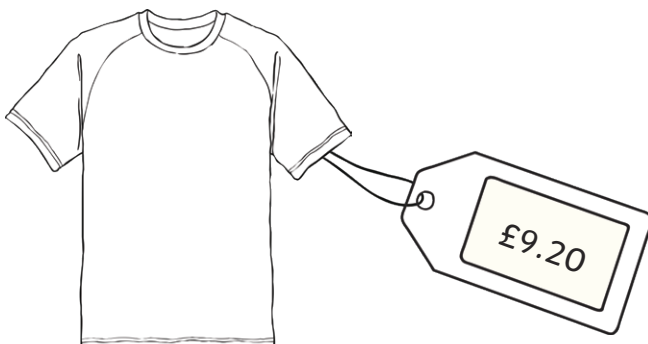
75% of price =

7.



75% of price =

8.



75% of price =

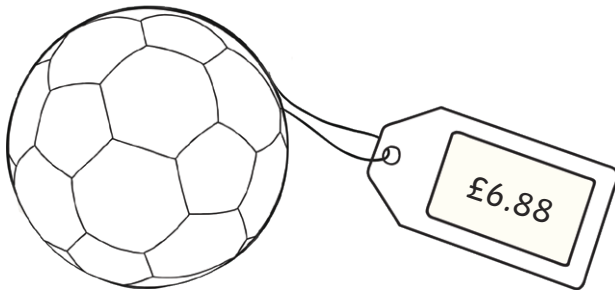
Finding Percentages of Amounts

Twinkl Department Store Sale!

For one day only, all our items are 75% of their full price with a Twinkl Loyalty Card! Work out the sale price for each item in the shop.


Top tip: To find 75% of a number, you can find one half, then one quarter, then add the two numbers together.

9.



75% of price =

10.



75% of price =

Challenge: Next week, all the full prices will increase by 25%. Work out the new price for each item. (Hint: Find one quarter and add it to the full price.)

Finding Percentages of Amounts **Answers**

	Item	Full Price	Sale Price	Challenge (+25% Price)
1.	Trainers	£46.20	75% = £34.65	£57.75
2.	Book	£12.80	75% = £9.60	£16.00
3.	Hairdryer	£16.40	75% = £12.30	£20.50
4.	Mobile phone	£63.60	75% = £47.70	£79.50
5.	Tablet	£141.00	75% = £105.75	£176.25
6.	Jeans	£28.80	75% = £21.60	£36.00
7.	Pencil case	£4.40	75% = £3.30	£5.50
8.	T-Shirt	£9.20	75% = £6.90	£11.50
9.	Football	£6.88	75% = £5.16	£8.60
10.	Guitar	£32.64	75% = £24.48	£40.80